

**PONY
CLUB**




Mini Care of the Foot Workbook



Can you see the horse's feet in this picture?

What are a horse's feet usually called?



Match each of the words to the correct part of the horse's foot.

Hoof wall

Coronet band

Heel bulb

Periople



Match each of the words to the correct part of the horse's foot.

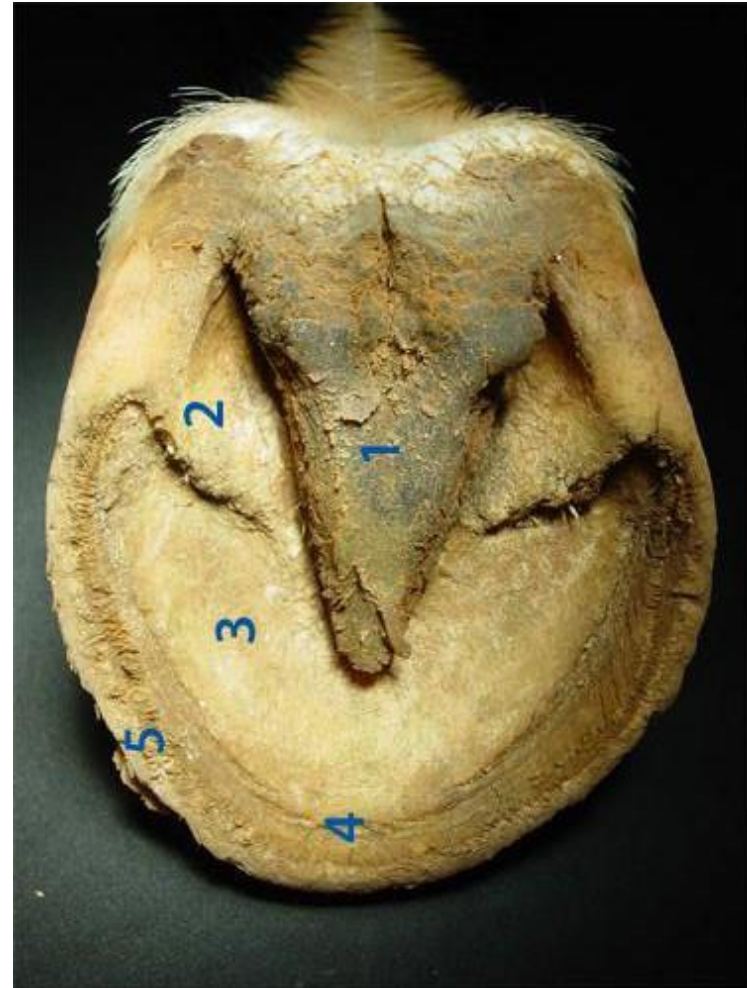
Frog –

White line –

Bars -

Hoof Wall -

Sole –



Reshuffle the words below to identify some of the different parts of a horse's foot.

LEOS - _____

BSAR - _____

GFOR - _____

HFOO LLWA - _____

RTENCOO NDBA - _____



Who is this person?

What does this person do?

How often should this person come and visit your horse or pony?

What would happen if this person did not come and visit your horse or pony regularly enough?

Which of these horses has shoes on?

Answer: _____

Which of these horses is not shod?

Answer: _____

Horse 1




Horse 2



Horse 3





Name this tool:

What is it used for?

How often should this be used?

Where should it be kept?

What should always be used alongside this tool to help to keep the yard clean and tidy?



Name this equipment:

What is it used for?

How often should this be used?

Where should it be kept?

Recap Task - Word search

Find the words below in the word search.

HOOF	
FROG	
SHOE	
HOOF PICK	
CORONET BAND	
WHITE LINE	
FARRIER	
SOLE	
BARS	
HOOF OIL	

C	H	S	D	G	G	Q	W	E	R	T
W	O	Y	U	I	O	O	P	S	F	A
H	O	R	E	W	R	E	R	O	A	S
I	F	H	O	O	F	O	I	L	R	D
T	Z	N	R	N	T	Y	U	E	R	F
E	X	S	H	O	E	P	A	S	I	G
L	C	M	T	D	F	T	G	H	E	H
I	V	Q	Y	S	D	H	B	A	R	S
N	B	W	U	G	D	S	V	A	K	J
E	H	O	O	F	P	I	C	K	N	K
D	U	N	A	I	N	C	R	O	Y	D

BONUS – WHERE WE HOLD OUR RALLIES?